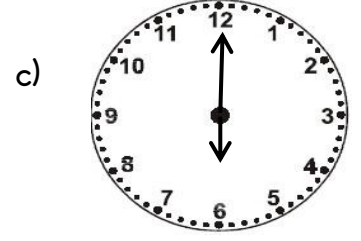

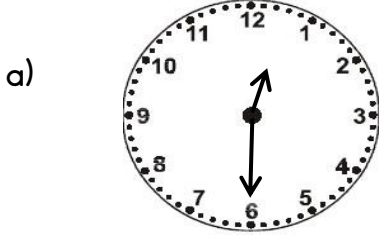


S1. Verilen saatlerden hangisi 12 buçuęu göstermektedir?



S2. Şeyma akşam saat 10 ' da uyuyor.


Sabah 7 ' de uyanıyor. Buna göre ,

Şeyma, kaç saat uyumuş olur?


a) 9 saat

b) 6 saat

c) 12 saat



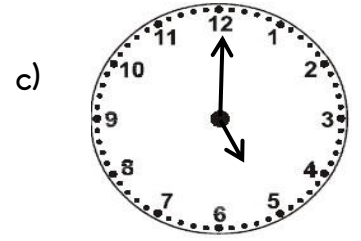
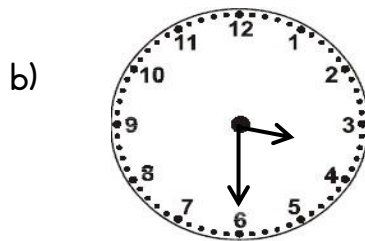

uyuma



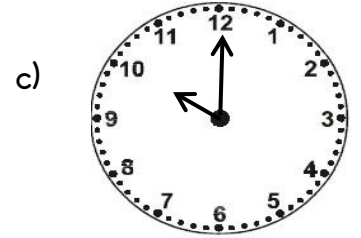

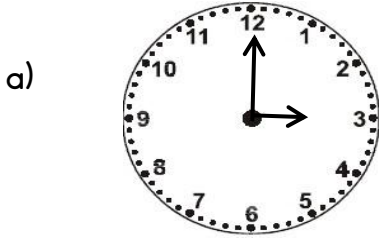
uyanma

S3. Samsun' dan saat 4' te yola çıkan bir otomobil 3 saat sonra Amasya' ya varıyor.

Aşağıdaki saatlerden hangisi, otomobilin varış saatini doğru olarak gösterir?



S4. " 2 saat sonra saat 3 olacak " diyen birisi, hangi saate bakmaktadır?

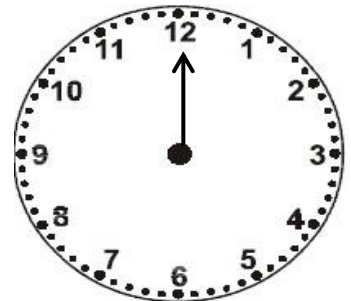


S5. Yanda verilen saat üzerinde çizmeyi unuttuęumuz, saati gösteren kolun adı nedir?

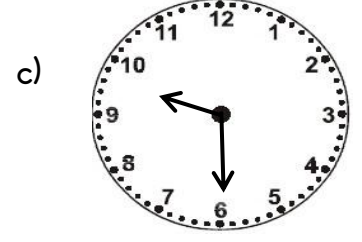
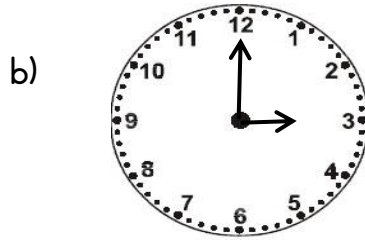

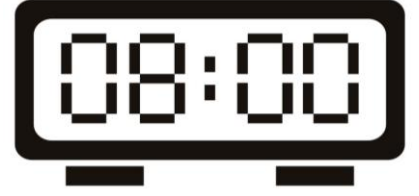
a) dakika

b) yelkovan

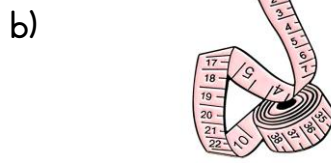
c) akrep



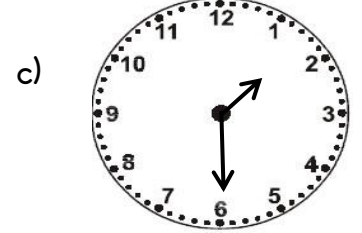

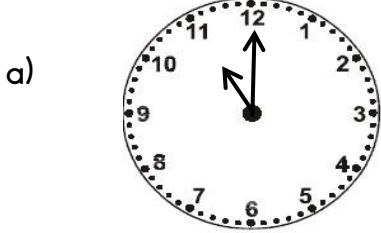
S6. Yandaki verilen dijital saat üzerindeki zamanı gösteren analog saat hangisidir?



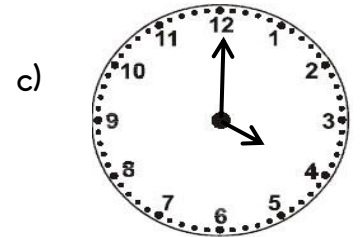
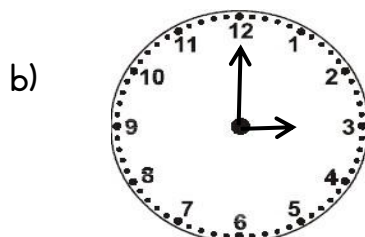

S7. Hangisi ile zamanı ölçmeyiz?



S8. Saat 3' te havuzdan dönen Murat, saate baktığında aşağıdakilerden hangisini görür?



S9. İbrahim, ders çalışmaya 12' de başladı. 2 saat ders çalıştı. İbrahim' in dersi bittiğinde saat kaç göstermektedir?



S10. Verilen saatlerden hangisi 5 saat sonra 11 olacaktır?

