

Küçük resimdeki nesneleri büyük resim içine gizlenmiş. Onları aynı renklere boyayınız.



TATİL KİTABI



MATEMATİK

Önceki ve sonraki sayıları yazınız.


	18			93			40	
	79			82			78	
	84			84			35	
	64			55			41	
	22			13			51	
	46			98			61	
	97			88			17	
	45			57			26	
	10			34			80	
	83			94			51	
	42			85			20	
	18			28			22	


Aşağıda verilen sayıları devam ettiriniz.

45	46	47							
88	89	90							
75	76	77							
45	46	47							
30	31	32							
27	28	29							
38	39	40							
85	86	87							
33	34	35							
55	56	57							
67	68	69							
27	28	29							
31	32	33							

Verilen sayıların arasında kalan sayıları yazınız.

39		41	7		9	53		55
98		100	50		52	68		70
12		14	17		19	51		53
27		29	22		24	11		13
71		73	14		16	81		83
12		14	20		22	88		90
43		45	84		86	94		96
77		79	79		81	77		79
13		15	2		4	46		48
75		77	65		67	24		26
90		92	1		3	3		5
49		51	2		4	49		51
80		82	77		79	4		6





BÜYÜK OLANIN İÇİNİ **KIRMIZI KALEM** İLE 3 KEZ TARAYINIZ.

81	61	88	76	30	74
62	15	7	20	63	12
33	36	25	61	65	68
98	59	59	99	58	6
27	43	51	27	11	60
30	69	98	73	28	38
64	11	69	35	73	33
48	89	20	28	67	72
42	12	78	63	14	74
73	88	65	14	22	79
33	67	50	2	92	68
51	90	32	2	1	21
68	81	83	2	66	3

TOPLAMALARI YAPINIZ.

$$\begin{array}{r} 21 \\ + 44 \\ \hline \end{array}$$

$$\begin{array}{r} 65 \\ + 23 \\ \hline \end{array}$$

$$\begin{array}{r} 87 \\ + 12 \\ \hline \end{array}$$

$$\begin{array}{r} 75 \\ + 12 \\ \hline \end{array}$$

$$\begin{array}{r} 47 \\ + 42 \\ \hline \end{array}$$

$$\begin{array}{r} 64 \\ + 25 \\ \hline \end{array}$$

$$\begin{array}{r} 35 \\ + 43 \\ \hline \end{array}$$

$$\begin{array}{r} 60 \\ + 17 \\ \hline \end{array}$$

$$\begin{array}{r} 36 \\ + 12 \\ \hline \end{array}$$

$$\begin{array}{r} 42 \\ + 35 \\ \hline \end{array}$$

$$\begin{array}{r} 65 \\ + 24 \\ \hline \end{array}$$

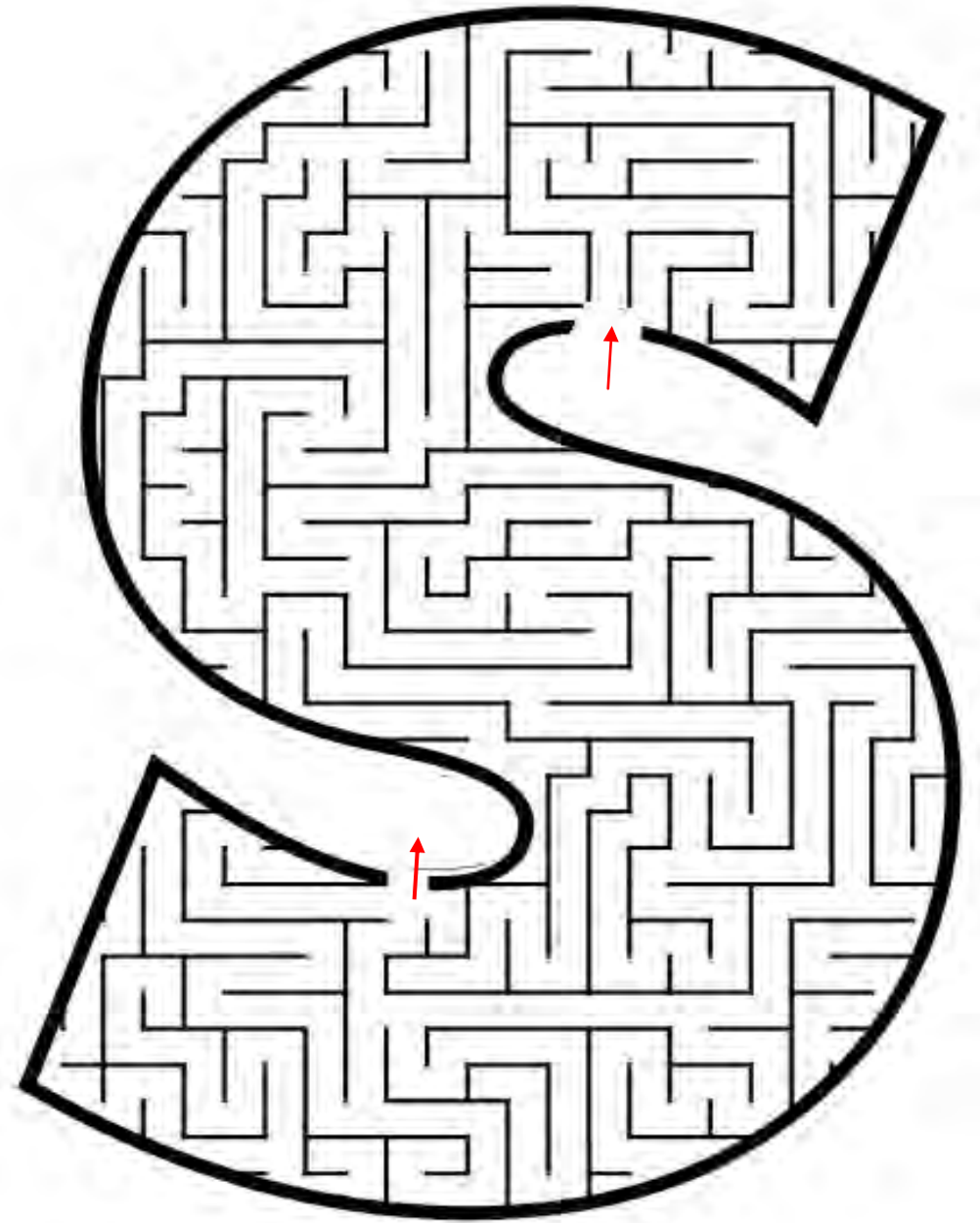
$$\begin{array}{r} 50 \\ + 22 \\ \hline \end{array}$$

$$\begin{array}{r} 44 \\ + 35 \\ \hline \end{array}$$

$$\begin{array}{r} 35 \\ + 34 \\ \hline \end{array}$$

$$\begin{array}{r} 25 \\ + 72 \\ \hline \end{array}$$

$$\begin{array}{r} 16 \\ + 52 \\ \hline \end{array}$$



ÇIKARMALARI YAPINIZ.

$$\begin{array}{r} 59 \\ - 16 \\ \hline \end{array}$$

$$\begin{array}{r} 21 \\ - 21 \\ \hline \end{array}$$

$$\begin{array}{r} 89 \\ - 67 \\ \hline \end{array}$$

$$\begin{array}{r} 36 \\ - 23 \\ \hline \end{array}$$

$$\begin{array}{r} 73 \\ - 12 \\ \hline \end{array}$$

$$\begin{array}{r} 46 \\ - 12 \\ \hline \end{array}$$

$$\begin{array}{r} 95 \\ - 42 \\ \hline \end{array}$$

$$\begin{array}{r} 74 \\ - 74 \\ \hline \end{array}$$

$$\begin{array}{r} 68 \\ - 32 \\ \hline \end{array}$$

$$\begin{array}{r} 77 \\ - 66 \\ \hline \end{array}$$

$$\begin{array}{r} 52 \\ - 31 \\ \hline \end{array}$$

$$\begin{array}{r} 73 \\ - 33 \\ \hline \end{array}$$

$$\begin{array}{r} 69 \\ - 65 \\ \hline \end{array}$$

$$\begin{array}{r} 77 \\ - 42 \\ \hline \end{array}$$

$$\begin{array}{r} 85 \\ - 72 \\ \hline \end{array}$$

$$\begin{array}{r} 65 \\ - 44 \\ \hline \end{array}$$

TOPLAMALARI YAPINIZ.

$$\begin{array}{r} 72 \\ + 24 \\ \hline \end{array}$$

$$\begin{array}{r} 66 \\ + 22 \\ \hline \end{array}$$

$$\begin{array}{r} 45 \\ + 54 \\ \hline \end{array}$$

$$\begin{array}{r} 62 \\ + 33 \\ \hline \end{array}$$

$$\begin{array}{r} 64 \\ + 32 \\ \hline \end{array}$$

$$\begin{array}{r} 61 \\ + 35 \\ \hline \end{array}$$

$$\begin{array}{r} 47 \\ + 12 \\ \hline \end{array}$$

$$\begin{array}{r} 64 \\ + 22 \\ \hline \end{array}$$

$$\begin{array}{r} 57 \\ + 21 \\ \hline \end{array}$$

$$\begin{array}{r} 18 \\ + 41 \\ \hline \end{array}$$

$$\begin{array}{r} 65 \\ + 13 \\ \hline \end{array}$$

$$\begin{array}{r} 42 \\ + 47 \\ \hline \end{array}$$

$$\begin{array}{r} 44 \\ + 25 \\ \hline \end{array}$$

$$\begin{array}{r} 10 \\ + 16 \\ \hline \end{array}$$


$$\begin{array}{r} 58 \\ + 21 \\ \hline \end{array}$$

$$\begin{array}{r} 14 \\ + 22 \\ \hline \end{array}$$

2 RESİM ARASINDAKİ FARKLARI BULUNUZ.



2 RESİM ARASINDAKİ FARKLARI BULUNUZ.

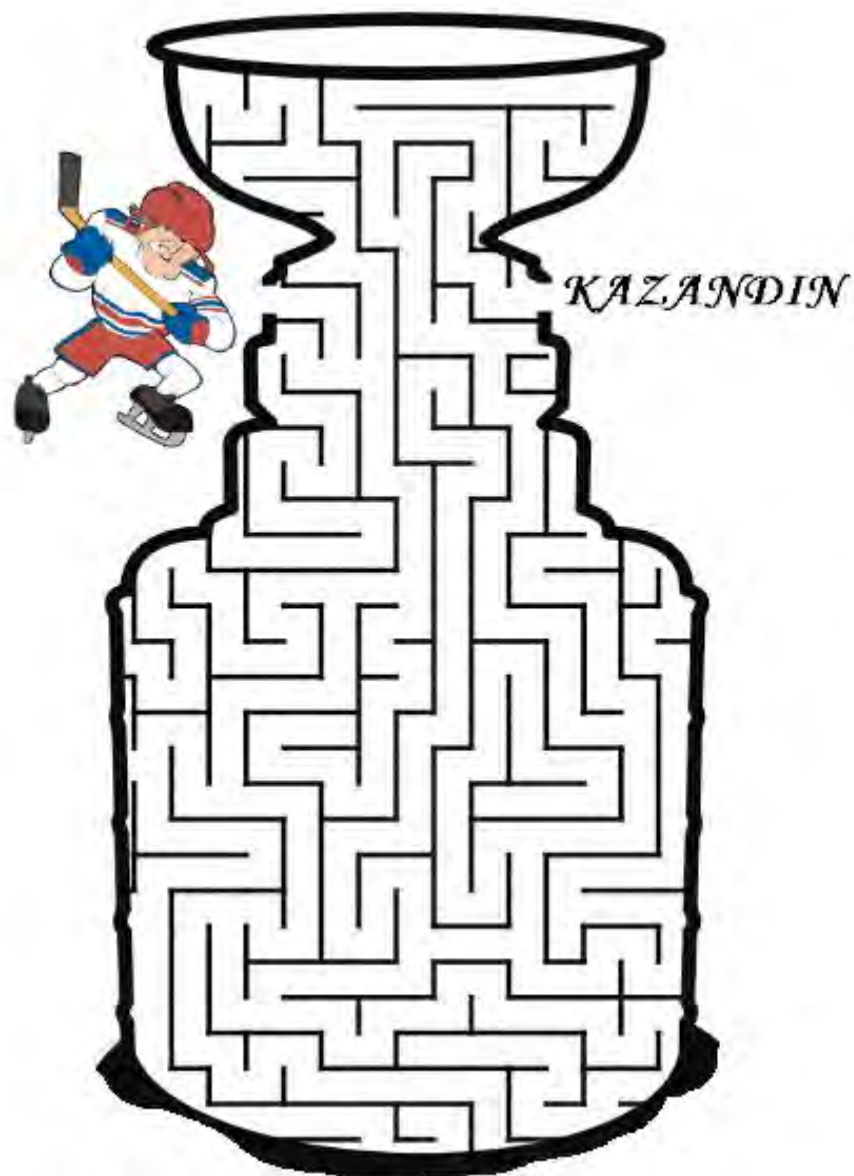
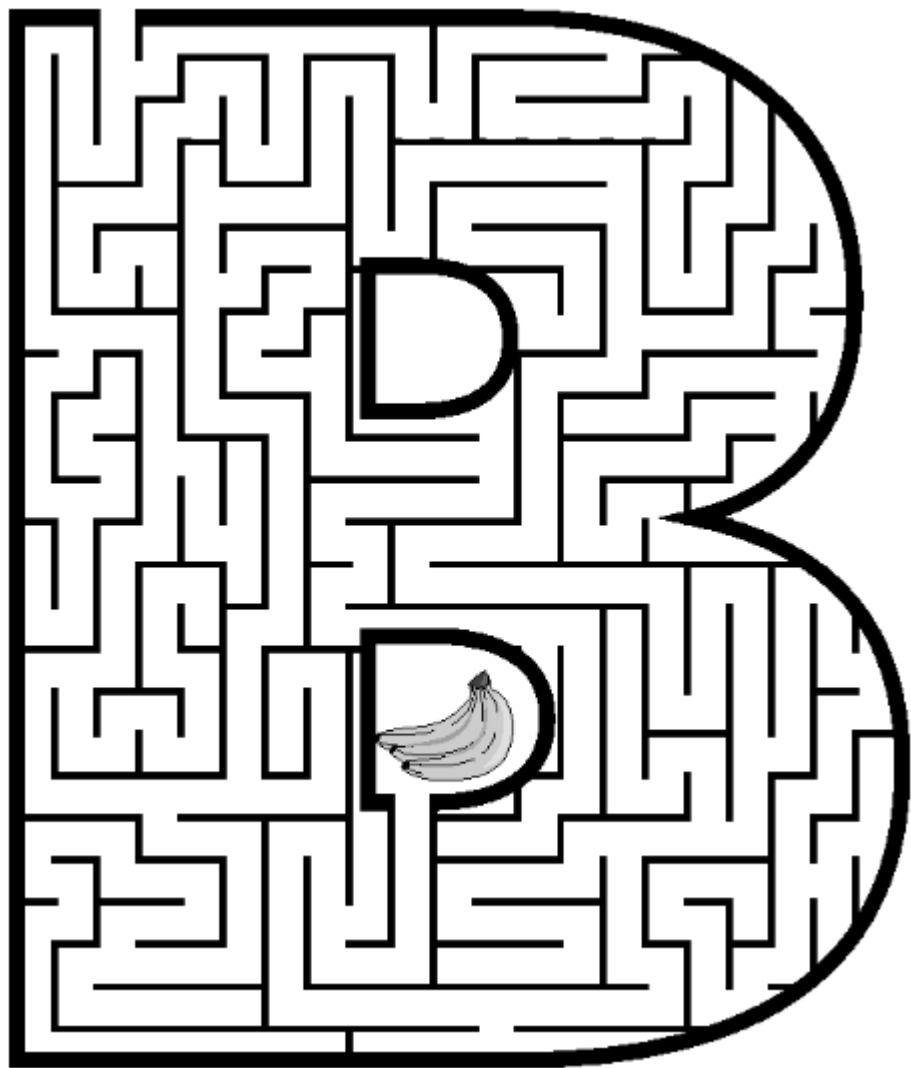


Aşağıda verilen sayıları devam ettiriniz.


84	85	86							
26	27	28							
72	73	74							
91	92	93							
65	66	67							
87	88	89							
45	46	47							
4	5	6							
81	82	83							
72	73	74							
56	57	58							

Aşağıda verilen sayıları devam ettiriniz.


30	35	40							
20	25	30							
50	55	60							
25	30	35							
10	15	20							
25	30	35							
50	55	60							
45	50	55							
20	25	30							
45	50	55							
50	55	60							



1'ER RİTMİK
SAY



5'ER RİTMİK
SAY



10'AR RİTMİK
SAY

