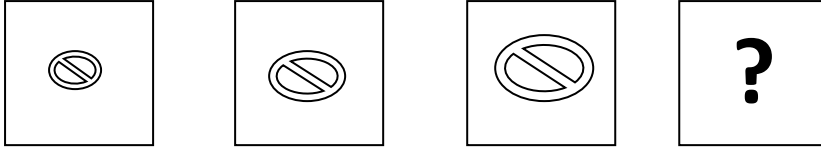


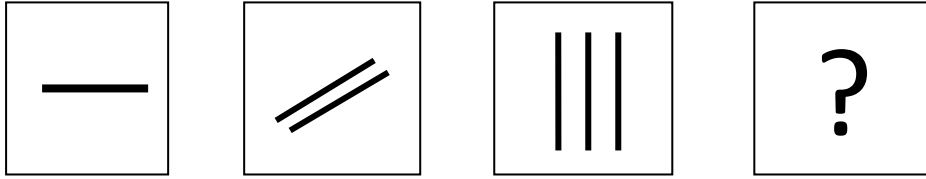
1.



Soru işareti yerine hangi seçenekteki şekil gelmelidir?

- A)
- B)
- C)
- D)

2.











Yukarıdaki şekilde soru işareti yerine hangi seçenekteki şekil gelmelidir?

- A)
- B)
- C)
- D)


3. Aşağıdaki şekillerin hangisinde nokta dairenin içinde ama karenin dışındadır?


- A)
- B)
- C)
- D)

4.


		
		
		?

Yandaki şekilde soru işareti yerine hangi şekil gelmelidir?

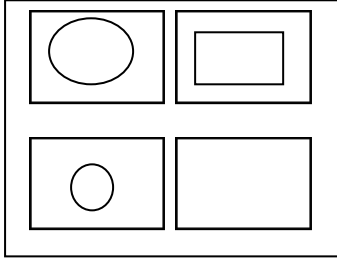
A) 

C) 


B) 


D) 

5.




Yandaki şekilde boş karenin içine hangi şekil gelmelidir?


A) 

C) 

B) 

D) 

6.



Yukarıdaki şekilde anlatılmak istenen kelime aşağıdakilerden hangisidir?


A) Fil

B) File

C) Filiz

D) Fil hortumu

7.



Yukarıdaki şekilde anlatılmak istenen kelime aşağıdakilerden hangisidir?

- A) Sıra
- B) Sarı
- C) Arı
- D) Darı

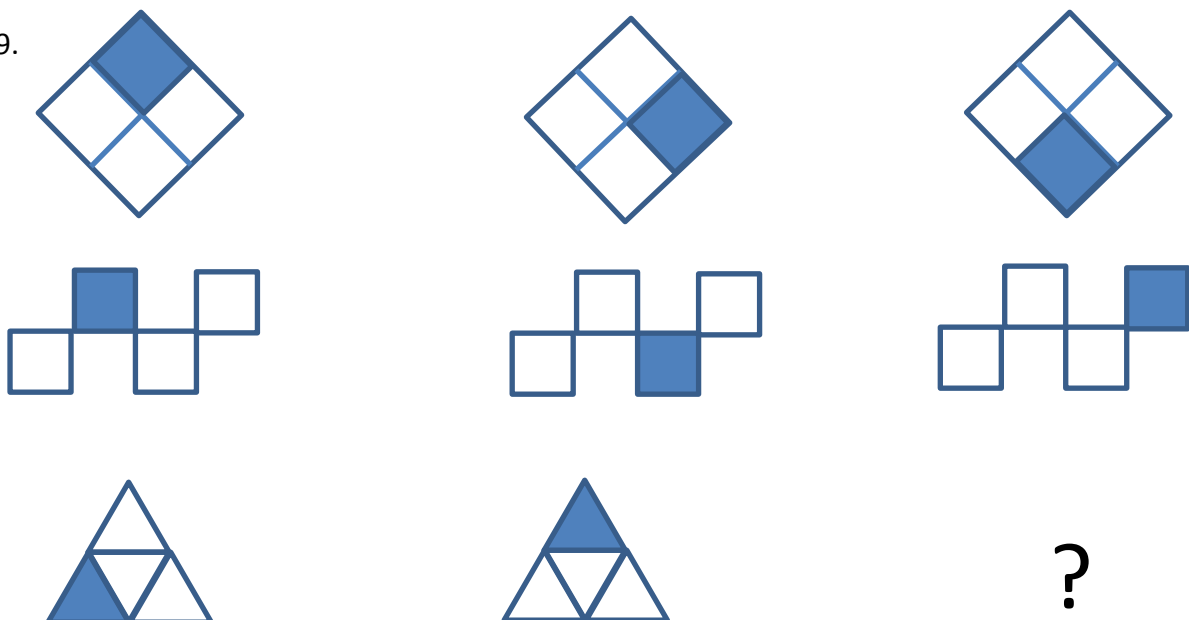
8.



Yukarıdaki şekilde anlatılmak istenen kelime aşağıdakilerden hangisidir?

- A) Deve
- B) Deveci
- C) Davet
- D) Devlet

9.



A)



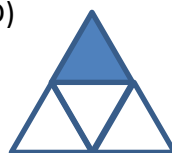
B)



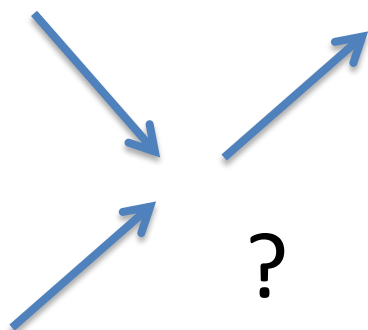
C)



D)



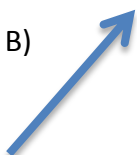
10.



A)



B)



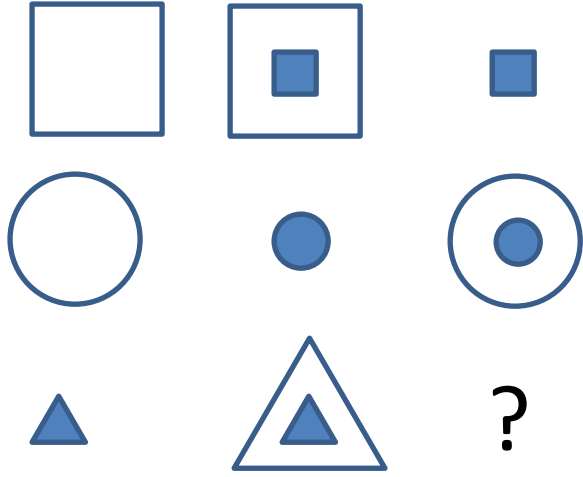
C)




D)



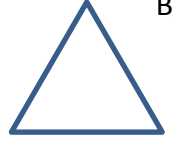
11.



A)



B)



C)



D)

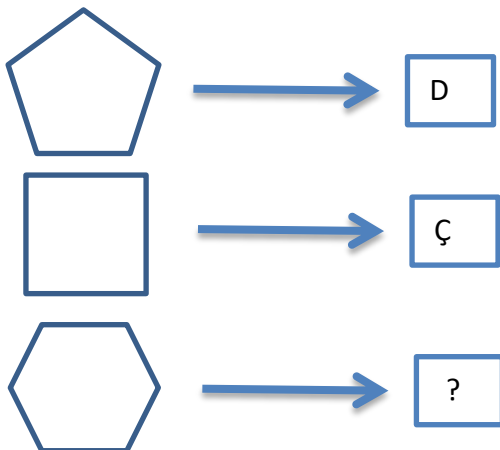


12.

Harflerinin yerleri değiştirilip yeni kelime oluşturulduğunda “Doruk” anlamını taşıyacak kelime aşağıdakilerden hangisidir?

- A) ÇARIK
- B) VEZİR
- C) TARAK
- D) DESEN

13.



? İşareti yerine aşağıdakilerden hangisi gelmelidir?

- A) A
- B) E
- C) G
- D) K

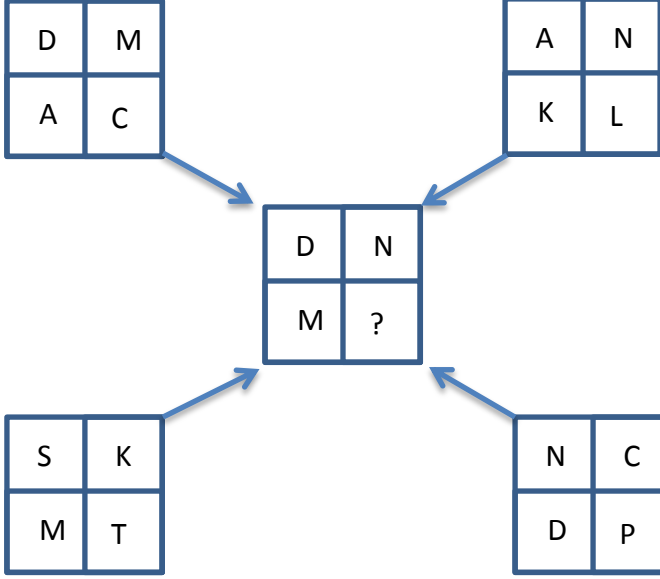
14.

**ÇORUM → MANİSA → ADIYAMAN → ?**

? İşareti yerine aşağıdakilerden hangisi gelmelidir?

- A) NEVŞEHİR
- B) ÇANKIRI
- C) DİYARBAKIR
- D) ANKARA

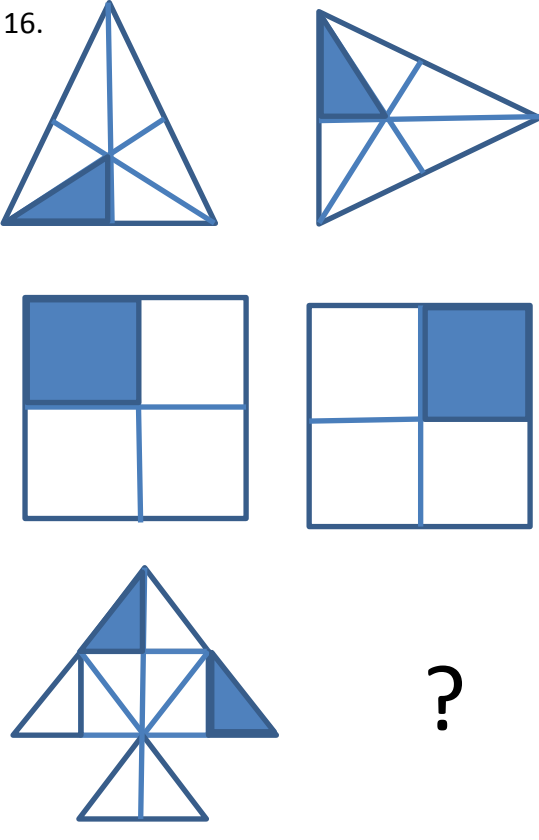
15.



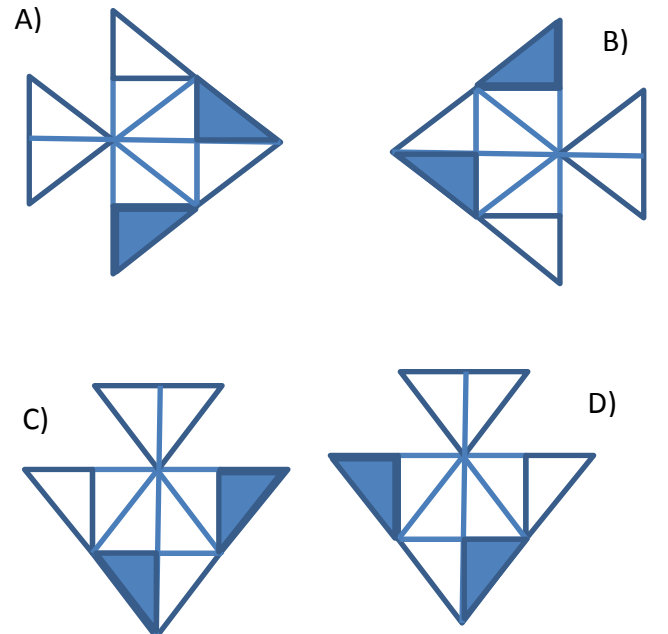
? İşareti yerine aşağıdakilerden hangisi gelmelidir?

- A) D
- B) N
- C) C
- D) P


16.



? İşareti yerine aşağıdakilerden hangisi gelmelidir?




17.




?


A)




B)



C)



D)



18.

2	5
3	7

3	2
7	5

7	3
5	2

?

A)

7	5
2	3

B)

7	3
2	5

C)

3	7
5	2

D)

5	7
2	3

19.

O → C

E → F

B → ?

? İşareti yerine aşağıdakilerden hangisi gelmelidir?







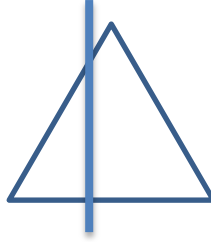

E) D

F) R

G) P

H) G

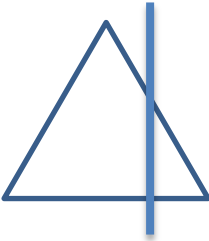
20.




?

Yukarıda ? işareti yerine aşağıdakilerden hangisi gelmelidir?

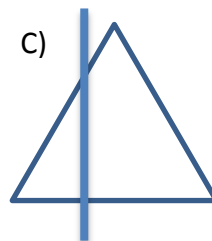
A)



B)



C)



D)

