


Adı :..... Soyadı:..... /...../.....

TAM SAATLERİ SAAT ÜZERİNDE GÖSTERME-1


Verilen bilgilere göre saatleri şekil üzerinde gösterelim, boşlukları dolduralım. Yelkovanları kırmızı, akrepleri siyah kalemle gösterelim.

Akrep 1'i gösteriyor.
Yelkovan 12'nin üstünde.




Saat 01:00 yani saat 1.

Akrep
Yelkovan




Saat : yani saat 5 .

Akrep
Yelkovan




Saat 07 : 00 yani saat

Akrep
Yelkovan




Saat : yani saat 3 .

Akrep
Yelkovan




Saat 06 : 00 yani saat

Akrep
Yelkovan




Saat 10 : 00 yani saat

Akrep
 Yelkovan




Saat : yani saat 2 .

Akrep
 Yelkovan




Saat : yani saat 4 .

Akrep
 Yelkovan




Saat 08 : 00 yani saat

Akrep
 Yelkovan




Saat 12 : 00 yani saat

Akrep
 Yelkovan



Saat : yani saat 11 .

Akrep
 Yelkovan



Saat 09 : 00 yani saat