

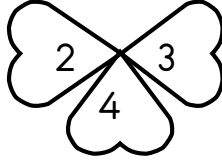

Adı Soyadı:.....

## ÇARPANLARIN BİRİNİN 1 AZALMASI YA DA ARTMASI-2



Aşağıdaki yoncalarda birbiriyle ay yapraktaki sayıları çarpalım.

a)



1) 
$$\begin{array}{r} 15 \\ \times 2 \\ \hline \end{array}$$


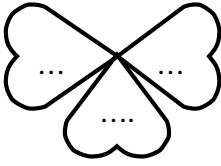
2) 
$$\begin{array}{r} 18 \\ \times 3 \\ \hline \end{array}$$

3) 
$$\begin{array}{r} 26 \\ \times 4 \\ \hline \end{array}$$



Yukarıdaki yoncaların 1. çarpanlarını 1 azaltarak işlemleri yeniden yapalım.

b)



1) 
$$\begin{array}{r} \dots \\ \times \dots \\ \hline \end{array}$$

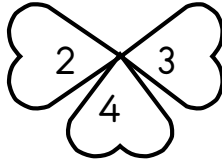
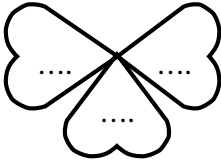
2) 
$$\begin{array}{r} \dots \\ \times \dots \\ \hline \end{array}$$

3) 
$$\begin{array}{r} \dots \\ \times \dots \\ \hline \end{array}$$



İlk yoncalarla yaptığımız işlemde 1. çarpanları 1 artırarak işlemleri yeniden yapalım.

c)



1) 
$$\begin{array}{r} \dots \\ \times \dots \\ \hline \end{array}$$



2) 
$$\begin{array}{r} \dots \\ \times \dots \\ \hline \end{array}$$

3) 
$$\begin{array}{r} \dots \\ \times \dots \\ \hline \end{array}$$



İlk yoncalarla yaptığımız işlemde 2. çarpanları 1 artırarak işlemleri yeniden yapalım.

d)



1) 
$$\begin{array}{r} \dots \\ \times \dots \\ \hline \end{array}$$



2) 
$$\begin{array}{r} \dots \\ \times \dots \\ \hline \end{array}$$

3) 
$$\begin{array}{r} \dots \\ \times \dots \\ \hline \end{array}$$



İlk yoncalarla yaptığımız işlemde 2. çarpanları 1 azaltarak işlemleri yeniden yapalım.

e)



1) 
$$\begin{array}{r} \dots \\ \times \dots \\ \hline \end{array}$$

2) 
$$\begin{array}{r} \dots \\ \times \dots \\ \hline \end{array}$$

3) 
$$\begin{array}{r} \dots \\ \times \dots \\ \hline \end{array}$$

