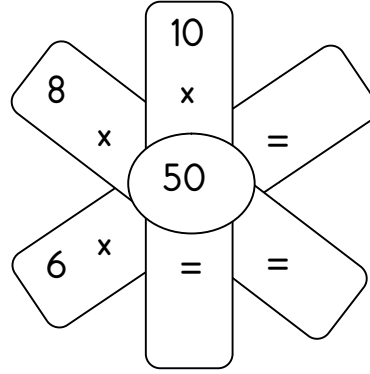
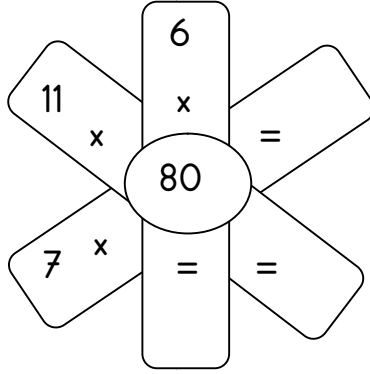
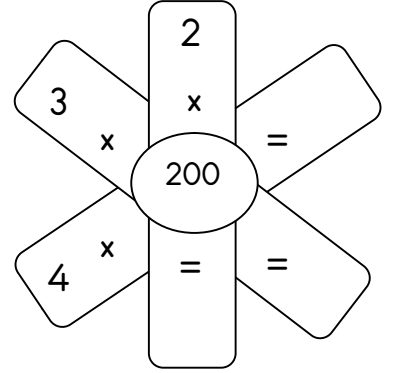
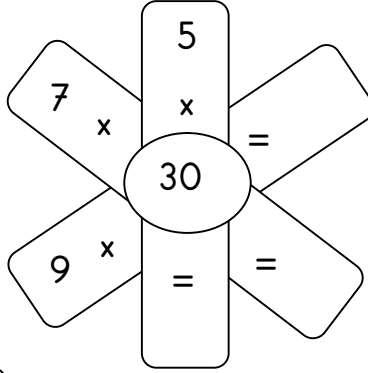
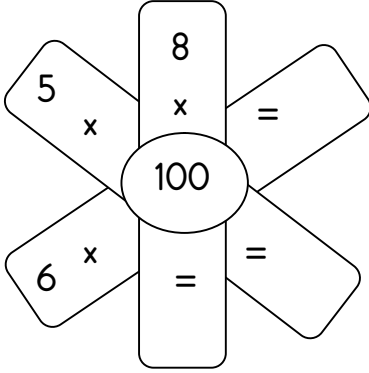


Adı Soyadı:.....

10 VE 100 İLE KISA YOLDAN ÇARPMA İŞLEMİ-2



Aşağıdaki çarklarda yer alan çarpma işlemlerini dıştan içeriye doğru yapınız.



Tabloda verilen çarpma işlemlerini kısa yoldan yapınız.

×	7	8	6	9	15	24	30	12	11
10									
20									
40									
100									
200									



Aşağıdaki çarpma işlemlerini kısa yoldan yapınız.

a)
$$\begin{array}{r} 20 \\ \times 30 \\ \hline 600 \end{array}$$

b)
$$\begin{array}{r} 30 \\ \times 40 \\ \hline \end{array}$$

c)
$$\begin{array}{r} 12 \\ \times 40 \\ \hline \end{array}$$

d)
$$\begin{array}{r} 200 \\ \times 4 \\ \hline \end{array}$$

e)
$$\begin{array}{r} 40 \\ \times 50 \\ \hline \end{array}$$

f)
$$\begin{array}{r} 15 \\ \times 30 \\ \hline \end{array}$$

g)
$$\begin{array}{r} 80 \\ \times 20 \\ \hline \end{array}$$

h)
$$\begin{array}{r} 24 \\ \times 20 \\ \hline \end{array}$$